


MKM PRIMARY SCHOOL NSAMBYA

TERM ONE RESEARCH WORK SET X

2020 P.7 SOCIAL STUDIES & R.E

NAME: STREAM:

SECTION A.

1.  This symbol represents a map of a tree, give the meaning of a map.
.....
.....
2. How is Uganda similar to South Sudan in terms of their location?
.....
3. Why was Africa known as the dark continent by Europeans?
.....
4. Give one reason why Ugandans vote for their leaders.
.....
5. Compare Mountain Usambara and Rwenzori in terms of their formation.
.....
6. Why did most explorers report at Zanzibar before penetrating East Africa?
.....
.....
7. What makes is common for people in Kisoro to put on thick clothes?
.....
.....
8. Why would it be a bad idea to put a cement factory in Mbarara?
.....
.....
9. Name the ocean current that contributes to dry conditions in Namib and Kalahari deserts of Africa.
.....
10. Give one way how road accidents can be controlled.
.....
11. How important was Colonel Patterson during the construction of the Uganda railway line?
.....

12. Emanuel Okwii has stayed in Uganda for more than ten years. How does he become a citizen of Uganda?
.....
13. Define the term vegetation.
.....
14. Why are the Bushmen remembered in the history of East Africa?
.....
15. Who was the Kabaka of Buganda at a time the first Arab traders came to Uganda?
.....
16. How important is a zebra crossing to the Pedestrians?
.....
.....
17. Mention the reason why President Museveni closed all schools recently?
.....
.....
18. Which type of climate favours the growing of citrus fruits in Africa?
.....
19. Why were the Plain Nilotes called so?
.....
.....
20. Give one factor that led to the downfall of the Chwezi dynasty?
.....
21. How is Sir Gerald Portal connected to Uganda's loss of independence?
.....
22. In which season do the Mediterranean climatic regions receive rainfall?
.....
23. Give one reason why the Nile delta has dense population?
.....
24. Point out one contribution of Dr. Apollo Milton Obote to Uganda's independence.
.....
25. Give one way in which Africans reacted towards British rule in Africa.
.....
26. Why is it important to plant trees on slopes of mountains?
.....

27. Why is the conservation of wetlands important in an area?

.....

28. Give one challenge affecting the economic and social development of African countries.

.....

29. What role is played by the East African Development Bank to member states of the East African Community?

.....

30. After how long does it take for a country to carry out a population census?

.....

31. Identify one reason why Kenya highlands are thickly populated.

.....

32. Why should you advise a farmer in Africa to export processed goods?

.....

.....

33. Apart from protection and company, how else was the dog important to early man?

.....

34. Compare the Bagisu and Chagga in terms of their economic activity.

.....

35. Mention one reason why Africans wanted to regain their independence.

.....

From 36 – 40, answer either Christianity or Islam but not both on the same number.

36. Either: Why did Judas Iscariot betray Jesus Christ?

.....

OR: Give one factor one must consider before prayers.

.....

37. Either; What important holiday marks the beginning of Lent period?

.....

OR: What important symbol marks the end of Ramadhan fast?

.....

38. Either: Why was Jesus crucified on the cross?

.....

OR: How did prophet Mohammed meet his death?

.....

39. Either: Give one reason why God chose Moses to lead Israelites from Egypt to Canaan.

.....

OR: why did Allah choose Musa to lead Israelites from Misiri to the promised land?

.....

40. Either: What is the visible sign of Baptism in Christianity?

.....

OR: Give one symbol of Islam.

.....

SECTION B.

41. Define the term nomadic pastoralism.

.....

.....

b) Give any 2 tribes in East Africa that carry out nomadic pastoralism.

i).....

ii).....

c) Identify one challenge facing nomadic pastoralists in East Africa.

.....

42. Mention one condition of weather.

.....

b) How do the following affect the climate of Africa?

i) Altitude

.....

.....

ii) Vegetation

.....

.....

c) How is a windsock important in an airport?

.....

.....

43. Why should Pedestrians keep right while using the road?

.....

b) How important are road signs to road users?

.....

c) State 2 ways of controlling road accidents apart from following the road signs.

i).....

ii).....

44. Why was the East African Community formed?

.....

b) Who is the current speaker of the East African Legislative Assembly.

.....

c) Identify the two new member states of the East African Community.

i) ii)

45. a) Define the term national constitution.

.....

.....

b) In which year was the Uganda's current constitution promulgated?

.....

Give two importance of a national constitution.

i).....

ii)

46. a) Why did missionaries come to East Africa?

.....

b) Explain the role played by Ludwig Krapf in the sector of Christianity.

.....

.....

c) Outline any 2 problems faced by missionaries during their work in East Africa.

i).....

ii).....

47. Give any two conditions that enable some plants to survive very hot climate.

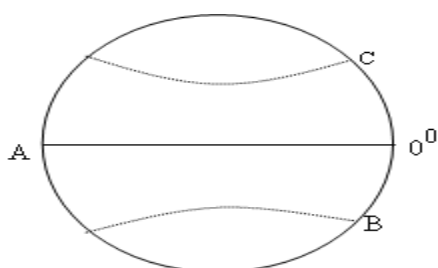
i).....

ii)

b) Identify any 2 tree species that grow in semi-arid and desert vegetation.

i) ii).....

48. Study the diagram and answer the questions that follow.



a) When is the sun overhead latitude marked B.

.....

b) Name one country in Africa crossed by latitude A.

.....

c) How important are the above latitudes to people?

.....

d) What causes day and night?

.....

49. What is meant by environmental degradation?

.....

b) Give two ways how man carries out environmental degradation.

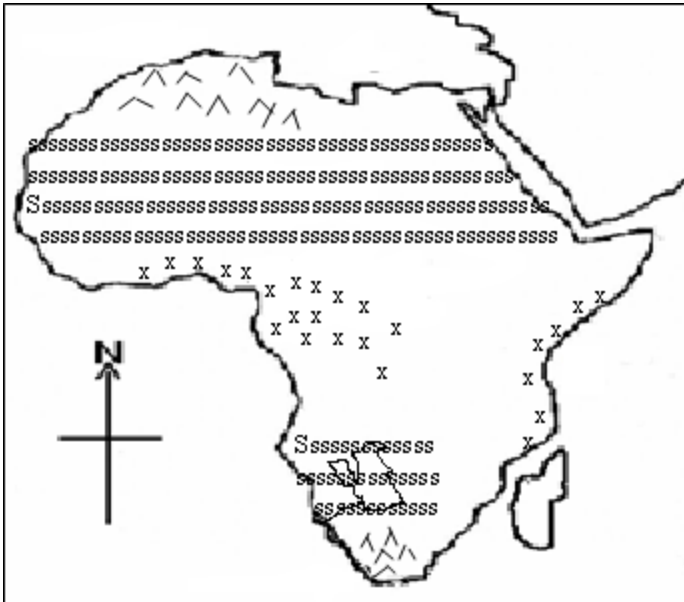
i).....

ii).....

c) State one reason why people carry out afforestation.

.....

50. Study the map below and answer questions that follow.



a) Which climatic regions are represented by the following symbols:

i) 

.....

ii) xx xxxx

.....

iii) ssssss

.....

b) Why do you think Africa has different types of climate?

.....

For questions 51-55, answer either Christianity or Islam but not both.

51. Either: State any 2 ways how God made man unique from other creatures.

i).....

ii)

b) Why did God make man unique from other creatures?

.....

c) How did man disappoint God?

.....

OR: Give at least 2 wives of prophet Mohammed.

i)ii).....

b) Why do you think Muslims are allowed to more than one wife?

.....

c) What term is used to mean holy marriage in Islam?

.....

52. Either: Give one reason why Jesus washed His disciple's feet?

.....

b) On which day did He wash His disciples' feet?

.....

c) Name any other two things that happened on that day apart from washing His disciples' feet.

i).....

ii).....

OR: Why are the following prophets remembered in Islam?

i) Prophet Adam

ii) Prophet Issa

iii) Prophet Nuhu

iv) Prophet Mohammed

53. Either: How important is Baptism in Christianity.

.....

b) Give any three types of Baptism in Christianity.

i).....

ii).....

iii).....

OR: Who is an Imam?

.....

Identify any three duties of an Imam.

i)

ii)

iii)

54. Either: What lessons do we learn from Jesus' perfect way of life?

.....

b) Mention any 3 miracles performed by Jesus Christ.

i)

ii)

iii)

OR; Why do Muslims go to Mecca?

.....

ii) What title does a Muslim man get after visiting Mecca.

.....

iii) Apart from visiting Mecca, name any two pillars of Islamic religion.

i).....

ii).....

55. Either: Name the son of Abraham who was to be sacrificed by his father.

.....

b) Why was Abraham going to do that?

.....

d) What two lessons do we learn from such an act?

i).....

ii).....

OR: Name the son of Prophet Ibrahim who was to be sacrificed by his father.

.....

b) Why was prophet Ibrahim going to sacrifice his real child?

.....

c) What two lessons do we learn from the above act?

i)

ii)

Good luck